



As recommended by [gov.uk](https://www.gov.uk)

Home Learning Pack Year 2

Week 9


22/06/2020



Take a picture while you work through this booklet and tweet us [@ClassroomSecLtd](https://twitter.com/ClassroomSecLtd) using the hashtags [#CSKids](https://twitter.com/CSKids) and [#HomeLearningHero](https://twitter.com/HomeLearningHero) to be in with a chance of winning a month's subscription to [classroomsecrets.co.uk](https://www.classroomsecrets.co.uk).

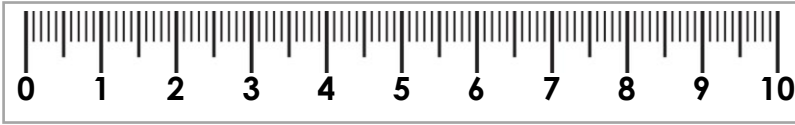
Monday – Measure Length cm

1. Match each toy to its measurement.



7cm

A.

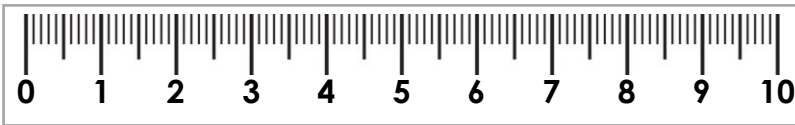


8cm



9cm

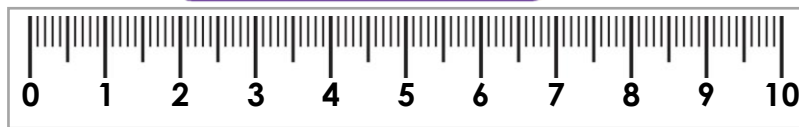
B.



2. Sam starts at the arrow and draws a 3cm line. Which number will his line finish on?



3. Zoe and Mike are measuring the length of a pencil. Who is correct? Explain why.



Zoe

This pencil is 8cm long.



Mike

This pencil is 6cm long.

Monday – Compound Nouns

1. Match the nouns below to create compound nouns. Write a list of the compound nouns.

sun

stick

green

ball

lip

house

base

flower

2. Add another noun to the words below to create a compound noun.

A. sand +

D. fire +

B. air +

E. lady +

C. hand +

F. rain +

3. Underline the mistakes in the sentence below.

I am travelling to the air port at the week end.

Rewrite the sentence correctly.

Tuesday – Compare Lengths

1. Circle the incorrect statements.

$12\text{m} < 12\text{cm}$

$21\text{cm} > 21\text{m}$


$36\text{ cm} < 56\text{cm}$

$41\text{cm} < 43\text{cm}$

$\text{five metres} = 5\text{cm}$

$45\text{m} = 45\text{cm}$

2. Simon and Dot are comparing their height. Simon is taller than Dot. How tall could Dot be?



Not to scale

99cm

95cm

85cm

3. Arrange the cards below to create three correct statements.

35cm

40m

>

40cm

<

Three rows of dashed boxes for creating statements:

Row 1: [] [] [] [] [] []

Row 2: [] [] []

Tuesday – Adding ‘-ment’, ‘-er’ and ‘-ness’

1. Add the suffix to the words to create new words. You may need to remove, add or change letters.

A.

punish

-ment

B.

healthy

-er

C.

greedy

-ness

D.

disappoint

-ment

2. Tick the boxes to show which suffixes can be added to the root words.

	word	-ment	-er	-ness
A.	enjoy			
B.	friendly			
C.	improve			
D.	gloomy			
E.	agree			

3. Emma has completed her homework about adding suffixes. Spot any mistakes she has made and correct them.

A. enjoy + ment = enjoiment

B. forgetful + ness = forgetfulness

C. sad + er = sader

Wednesday – Four Operations with Lengths

1. Sam has a piece of ribbon that is 30cm long. Troy's piece of ribbon is 5 times shorter than Sam's.



Not to scale

Circle the length of Troy's piece of ribbon.

6cm


25cm

10cm

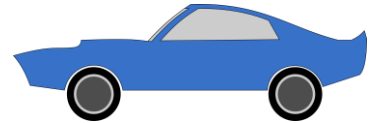
2. Which two toys added together total 70cm?



train
39cm



keyboard
31cm



car
15cm

Not to scale

3. Niko is building towers using thirty 1cm cubes.



Not to scale

His first tower is 18cm tall. His second tower is half the size of the first tower

How tall is the second tower?

How many cubes does he have left?

Wednesday – National Writing Day – Creative Writing Challenge

Read this story starter.

Forest Sports Day

It was sports day in the forest. All the animals looked forward to this day every year and they all wanted to win. Ray Rabbit won the hopping race because he is an expert at hopping. Fee Fox won the running race because she is faster than the others. Bart Badger won the egg and spoon race because he walked slowly and carefully. The last race was the sack race. Everyone was very excited. All the animals were determined to win. "On your marks, get set, go!" shouted Harry Hedgehog.



"I will win!" said Ray with a determined look on his face.

"Oh no you won't," said Fee. "I will win!"

"You're both wrong. I will win!" said Bart confidently.

Suddenly Bart tripped and fell over. He started to cry because he had hurt his knee. Ray and Fee both stopped and looked at poor Bart.

Now you write the rest of the story. Use the words in the word bank to help you.

Word bank

caring	help	kind	helpful	hooray
cheered	medal	finished	friends	together

Thursday – Compare Mass

1. Tick the statements that are correct.



A. one fox weighs $<$ two frogs


B. two foxes weigh $>$ four frogs

C. one fox weighs $>$ two frogs


2. Order the cards from lightest to heaviest.




A.




B.



C.



D.



3. Billy is comparing strawberries, cherries and apples. He thinks the strawberries are the heaviest. Is Billy correct? Explain how you know.



Thursday – Adding ‘-er’ for Comparative Adjectives

1. Add -er to the words below to make them comparative. The spelling of the root word might have to change.

wild

nice

quiet

shiny

dry

fat

wide

wet

2. Circle the comparative words in the sentences below.

A. The dog was heavier and older than the cat, but the cat could run farther than the dog.

B. Jaz was happier than ever. It was her birthday so she was awake earlier than usual.

3. Choose an adjective from the word bank and add the suffix -er.

fancy

thin

late

Now use it in a sentence.

Friday – Reading Comprehension

The UEFA Champions League

Read the information on the next page and answer the questions.

1. Who organises the Champions League?

2. When was the Champions League formed?

3. Why do you think the logo is called the starball?

4. Why do you think the games are held in the biggest stadiums?

5. What is another word for competition?

6. Why do some people watch the match on their television?

7. Have you ever seen a football game on television or at a stadium? Did you enjoy it?

8. Who won the European Cup last year?

Friday – Reading Comprehension

The UEFA Champions League

The Champions League is a football competition that takes place every year. It is organised by UEFA (you-ay-fuh). UEFA represent all the national football associations of Europe.



The Champions League was formed in 1955. Its logo is called the 'starball'.

Champions League games are usually held in the biggest stadiums in Europe. Many people go to cheer on their favourite teams. Fans chant for their teams and wave their scarves to show support.



Lots of people enjoy watching Champions League games on television, too. Some people even have parties. Millions of people watch the tournament every year.

The team that wins the league gets a special trophy called The European Cup. The 2018 – 2019 champions were Liverpool. They have won the competition 6 times!

